



INDIAN SCHOOL AL WADI AL KABIR

DEPARTMENT OF MATHEMATICS (2023-2024)

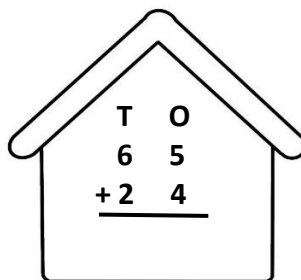

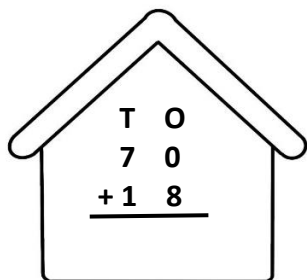
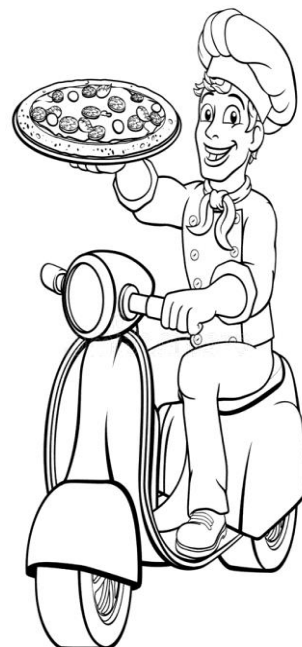


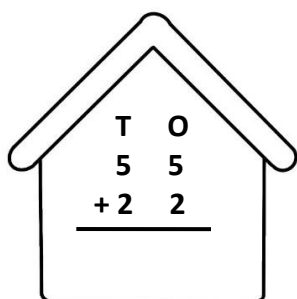
TOPIC: ADDITION

RECALL WORKSHEET

RESOURCE PERSON: Ms. Nikkhath Thouseef

NAME: _____ CLASS: _____ SEC: _____ DATE: _____

I. PIZZA DELIVERY PROBLEMS - Help the Pizza Man deliver pizzas to the correct house by solving the Math Problems. He remembers that the house number is the Predecessor of 90. Show him the location by colouring the correct house.



II. Add the following horizontally.

a. $36 + 4 =$ _____

e. $45 + 5 =$ _____

b. $12 + 14 =$ _____

f. $50 + 50 =$ _____

c. $25 + 10 =$ _____

g. $76 + 13 =$ _____

d. $30 + 30 =$ _____

h. $28 + 20 =$ _____

III. Fill in the blanks with the correct answers.

- a. 4 tens + 3 tens = _____ tens
- b. 5 ones + _____ one = 6 ones
- c. The sum of 64 and 3 is equal to _____.
- d. One more than 59 is _____.
- e. 10 and 10 altogether is _____.
- f. If we add 5 to 95 we will get _____.
- g. By adding 25 and 25 we will get _____.
- h. Adding 1 to 999 gives _____ as the answer.

IV. Solve the following.

- a. A shopkeeper sold 52 Smiley stickers and 15 Star stickers. How many stickers did he sell altogether?

No. of Smiley Stickers	=	
No. of Star Stickers	=	
Total No. of Stickers sold	=	
Ans:		

V. Think and Answer.

- a) 20 apples + 0 apples = _____ apples
- b) 10 hats + 5 hats = 5 hats + _____ hats

c) 